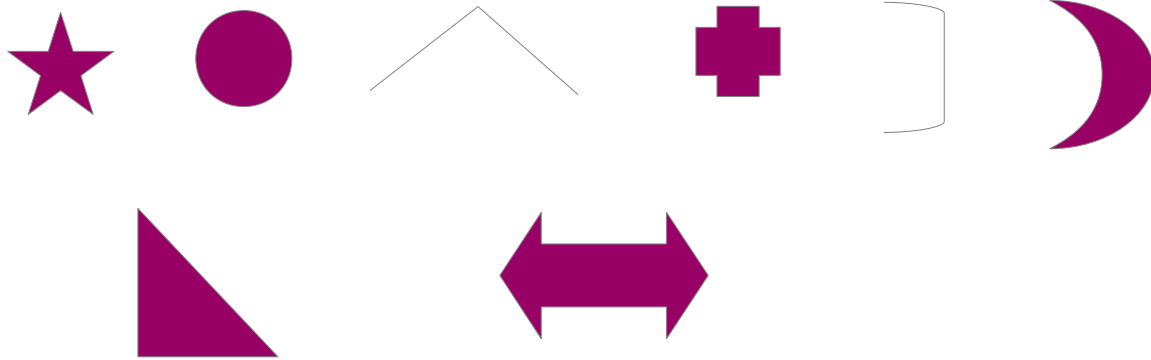
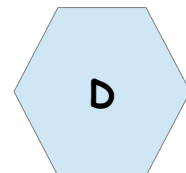
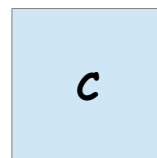
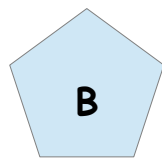
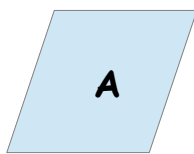


Les figures planes - les polygones

Exercice 1 : Entoure les formes qui sont des figures planes.



Exercice 2 : Complète le tableau suivant.



<u>Figures</u>	<u>Nombre de côtés</u>	<u>Nombre de sommets</u>
A	4	4
B	5	5
C	4	4
D	6	6

Géométrie - CE1

Les polygones

Fiche n°1

1 Colorie seulement les polygones.

